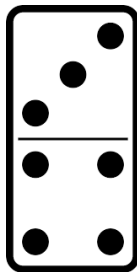


Unit 5 Everyday Math Review

1. Write the fact family.



2. Fill in the counts.

1,396, 1397, _____, _____, _____, _____, _____.

3. Write the numbers from least to greatest.

851 752 524 1,368

4. Draw two line segments using your ruler.

D •


• E

G •

• H

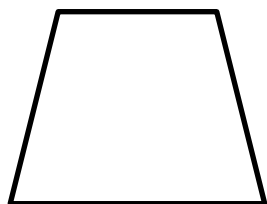
Unit 5 Everyday Math Review

5. What is this shape?



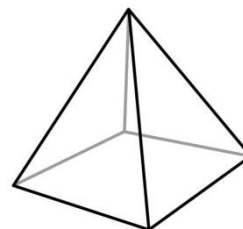
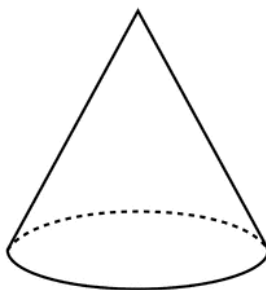
- ☐ hexagon
- ☐ rhombus
- ☐ square

6. What is this shape?



- ☐ rectangle
- ☐ triangle
- ☐ trapezoid


7. Name these shapes.



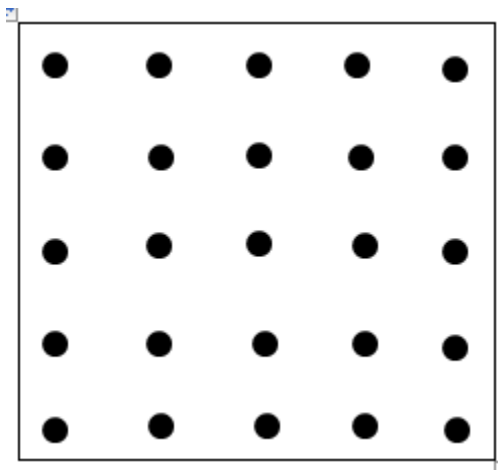
Unit 5 Everyday Math Review

8. Draw two parallel line segments.

(remember that all line segments have names)



9. Draw two line segments that are not parallel.



Unit 5 Everyday Math Review

