



EDM Unit 8 Study Guide

1. Which shows $\frac{1}{4}$ shaded? Fill in the oval.



0



0

2. Which fraction shows how much is shaded? Fill in the oval.



0

0

0

 $\frac{3}{4}$ $\frac{3}{5}$ $\frac{3}{6}$ 

0

0

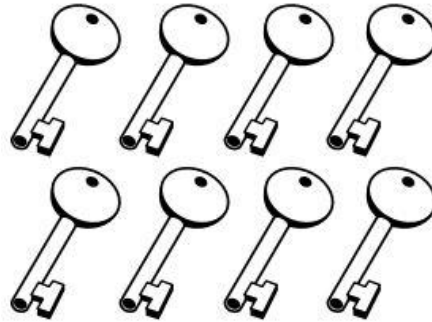
0

 $\frac{1}{4}$ $\frac{1}{6}$ $\frac{1}{8}$

3. Color $\frac{3}{8}$.




EDM Unit 8 Study Guide

4. Color $\frac{1}{2}$.5. Color $\frac{5}{8}$.


6. Write one thing you are sure will happen today.

7. Write one thing you are sure will NOT happen today.

8. Which drawing has a line of symmetry? Fill in the ovals.



0

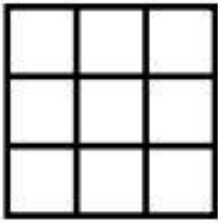


0



0



EDM Unit 8 Study Guide

9. Color $\frac{1}{3}$.

10. a. Divide into :

Halves

Fourths

Write $<$, $>$, or $=$.

b. $\frac{1}{2}$ ____ $\frac{1}{4}$

c. $\frac{2}{4}$ ____ $\frac{1}{2}$

11. a. Four people share 8 pennies equally. How many pennies does each person get? _____

b. $\frac{2}{3}$ of the pennies equals? _____12. Use counters to solve. There are 12 cookies. $\frac{1}{4}$ of them are chocolate chip. How many are chocolate chip? _____