

HOME LINK  
8•2

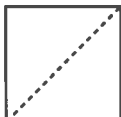
# Fractions of Shapes

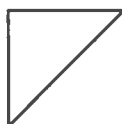
**Family Note**

In today's lesson, your child compared pattern blocks, one of which represents ONE whole. As you work on this activity with your child, keep in mind that the shape below the ONE is a fractional part of the whole shape. Remind your child that the size of a fractional part of a whole depends on the size of the whole.

*Please return this Home Link to school tomorrow.*




1. If this shape is ONE, 

then  is what fraction of the shape? \_\_\_\_\_

2. If this shape is ONE, 

then  is what fraction of the shape? \_\_\_\_\_

**Try This**

3. If this shape is ONE, 

then  is what fraction of the whole shape? \_\_\_\_\_

**Practice****Unit**

Solve.

$$\begin{array}{r} 4. \quad 75 \\ + 26 \\ \hline \end{array}$$

$$\begin{array}{r} 5. \quad 56 \\ + 45 \\ \hline \end{array}$$

$$\begin{array}{r} 6. \quad 84 \\ + 48 \\ \hline \end{array}$$

$$\begin{array}{r} 7. \quad 91 \\ + 67 \\ \hline \end{array}$$