

HOME LINK
9·7

Area and Perimeter

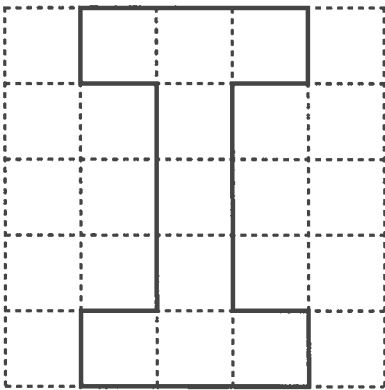

Family Note

Today children discussed the concept of finding the area of a surface. Area is measured by finding the number of square units needed to cover the surface inside a shape. Make sure your child understands that, when he or she is finding the perimeter of the letters in Problem 4, he or she is finding the distance around the outside of the letters.

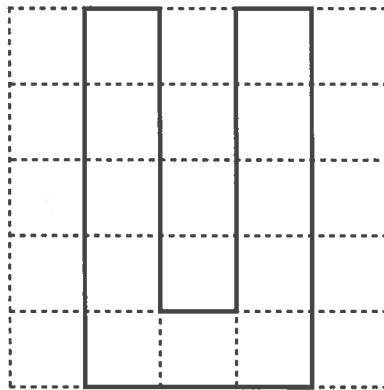
Please return this Home Link to school tomorrow.



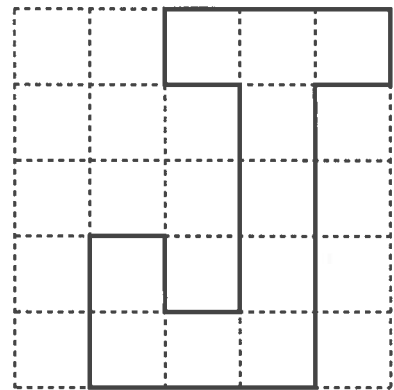
Find the area of each letter.

1.


Area = _____ sq cm

2.


Area = _____ sq cm

3.


Area = _____ sq cm

4. What is the perimeter of each letter?

I: _____ cm

U: _____ cm

J: _____ cm

Practice

5. $67 + 28 =$ _____

6. $154 - 62 =$ _____

7.
$$\begin{array}{r} 88 \\ + 74 \\ \hline \end{array}$$

8.
$$\begin{array}{r} 126 \\ - 23 \\ \hline \end{array}$$