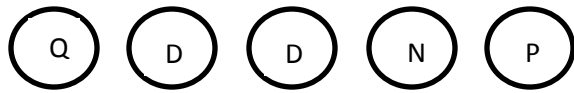
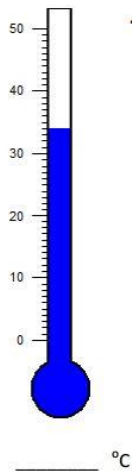


# Unit 4 Math Study Guide

1. How much money?

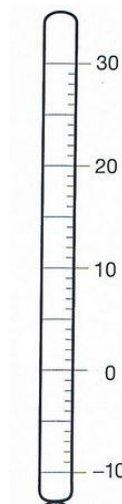


2. What is the temperature on the thermometer?



3. Mark each thermometer to show the temperature:

25



4.  $49 =$  \_\_\_\_\_ tens \_\_\_\_\_ ones

5. Are the numbers odd or even?

a. 38 \_\_\_\_\_ b. 27 \_\_\_\_\_

c. 169 \_\_\_\_\_ d. 324 \_\_\_\_\_

6. Fill in the grid.

|    |  |  |
|----|--|--|
|    |  |  |
| 35 |  |  |
|    |  |  |

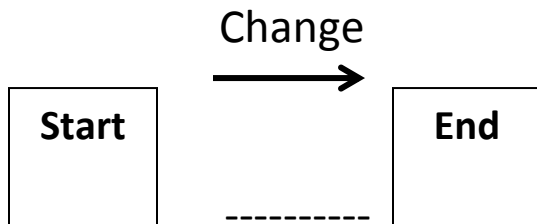
# Unit 4 Math Study Guide

7. Maitha bought a pack of gum for 42 cents. She paid with 2 quarters. How much change did she get back? \_\_\_\_\_

8. Circle the digit in the 100s place.

- a. 4,359                      b. 19,433                      c. 429

9. Hamda brought 27 biscuits to school for National Day. She gave 10 away. How many biscuits does she have now?



Answer: \_\_\_\_\_

Number Model: \_\_\_\_\_

Make a ballpark estimate. Write a number model to show your estimate. Next, solve. Show your work.

10. Estimate:                      11. Estimate:

a. \_\_\_\_\_                      a. \_\_\_\_\_

b. 35                                      b. 62

+ 41

+ 49